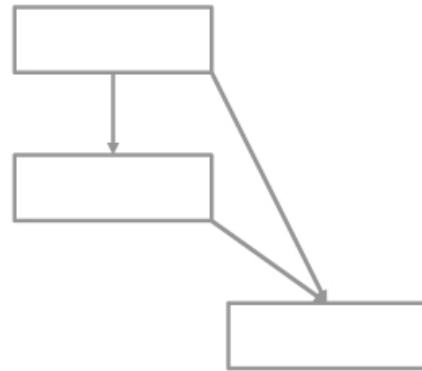


Name:
Period:

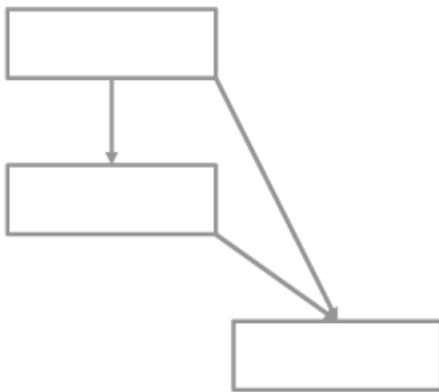
Date:

270. Label the chart for **The Augustinian Theory** at right, and briefly explain how it tries to resolve the synoptic problem.



The Augustinian Theory

271. Label the chart for **The Griesbach Theory** at left, and briefly explain how it tries to resolve the synoptic problem.

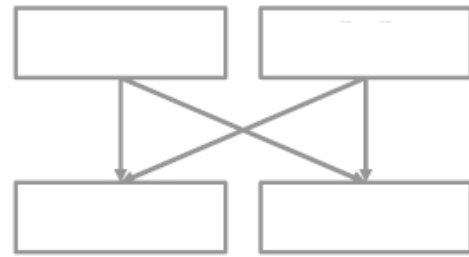


The Griesbach Theory

272. What is "Matthean Priority"? Why do both of the above solutions assume it?

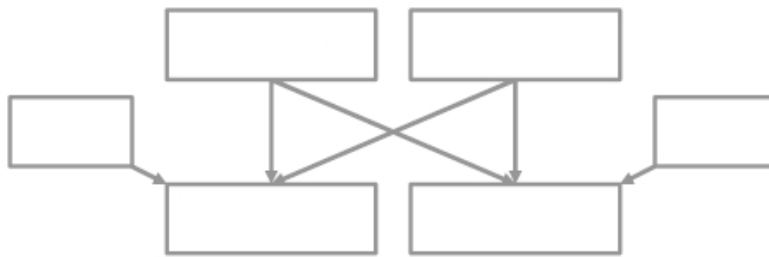
273. What are the problems with solutions to the synoptic problem that assume it?

274. Label the chart for **The Two-Source Theory** at right, and briefly explain how it tries to resolve the synoptic problem.



The Two-Source Theory

275. Label the chart for **The Four Source Theory** below, and briefly explain what it adds to the Two Source Theory above.

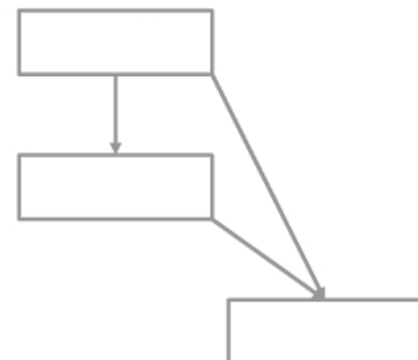


The Four-Source Theory

276. Define the following:

- Markan Priority
- "Q"
- "M"
- "L"

277. Label the chart for **The Farrer Theory** at right, and briefly explain how it tries to resolve the synoptic problem. Why do some scholars find it to be a compelling alternative to the 2/4 Source Theory?



The Farrer Theory